

LF: Fractions of an amount

Real story

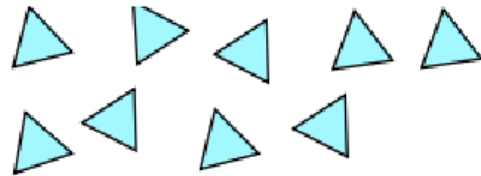
Maths story

Try it

1. Circle a third of the cakes.



2. Circle a third of the triangles.



3.  $\frac{1}{3}$  of 12 =

4. =  $\frac{1}{3}$  of 18




5. One third of 21 =

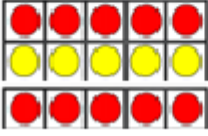
Real story

Maths story

Use it


1. Which pictures show  $\frac{1}{3}$ ?

A.  B.  C. 

D. 

Picture:

2. There are 9 sheep in a field.



1

3 of the sheep are girls.

How many sheep are boys?

sheep

3. I split my sweets between my mum and my dad.



What fraction of the sweets do they get each?

sweets